

STENOGRAPHER GRADE C and D EXAMINATION 2018 (5th Feb 2019, Shift-II)

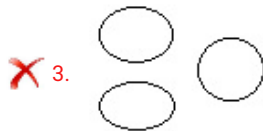
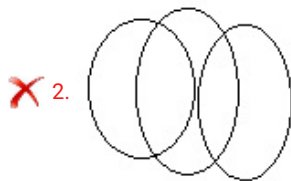
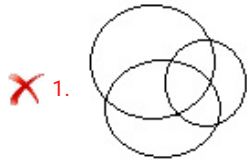
Exam Venue :	
Exam Time :	3:00 PM - 5:00 PM
Exam Date :	05/02/2019

Section : STENOGRAPHER GRADE C and D EXAMINATION 2018

Q.1 Which Venn diagram best represents the given set of classes?

Animals, Mammals, Goat

Ans



Question ID : 9895801324

Status : Answered

Chosen Option : 4

Q.2 Which one set of letters when sequentially placed at the gaps in the given letter series would complete it?

fgg ___ gff ___ f ___ gfg ___ fgf

Ans 1. fggf

2. ccfc

3. fgfg

4. ffgg

Question ID : 9895801292

Status : **Not Attempted and Marked For Review**
Chosen Option : --

Q.3 Select the correct option that will fill in the blank and complete the series.

0, 2, 3, 5, 10, 18, 33, 61, 112, _____

- Ans
- 1. 178
 - 2. 198
 - 3. 186
 - 4. 206

Question ID : **9895801318**
Status : **Not Attempted and Marked For Review**
Chosen Option : --

Q.4 Vilas went from his home to his college. He started his journey facing East. First, he went 2 km straight; then he turned to his right and went 3 km; finally, he turned left and walked 4 km to reach his college.

To which direction is Vilas's home located in relation to his college?

- Ans
- 1. South-west
 - 2. North-east
 - 3. South-East
 - 4. North-west

Question ID : **9895801323**
Status : **Answered**
Chosen Option : 4

Q.5 Select the correct option that will fill in the blank and complete the series.

1, 0, 5, 124, 11, 1330, 17, _____

- Ans
- 1. 4129
 - 2. 4138
 - 3. 4912
 - 4. 4813

Question ID : **9895801311**
Status : **Not Attempted and Marked For Review**
Chosen Option : --

Q.6 Select the option that is related to the third term in the same way as the second term is related to the first term.

VEGT : SHJQ :: FGCM : ?

- Ans
- 1. BJFJ
 - 2. CJPJ
 - 3. CJFJ
 - 4. DJPJ

Question ID : **9895801295**
Status : **Answered**

Q.7 Find the missing number from the below options.

4 9 9

7 4 ?

11 13 19

- Ans
- 1. 11
 - 2. 9
 - 3. 8
 - 4. 10

Question ID : 9895801320

Status : Answered

Chosen Option : 4

Q.8 In morning after sunrise a boy rode his bicycle 4 km towards North then he took right turn and rode 6 km then he took left turn and rode 5 km to reach his school. In which direction the starting point is with respect to location of School?

- Ans
- 1. Southeast
 - 2. Southwest
 - 3. Northwest
 - 4. Northeast

Question ID : 9895801321

Status : Answered

Chosen Option : 2

Q.9 Select the correct option that will fill in the blank and complete the series.

L, K, I, F, B, W, _____.

- Ans
- 1. S
 - 2. Q
 - 3. P
 - 4. R

Question ID : 9895801488

Status : Answered

Chosen Option : 2

Q.10 Four pairs of words have been given, out of which three are alike in some manner, while one is different. Choose out the odd one.

- Ans
- 1. Photo : Frame
 - 2. House : Compound wall
 - 3. Garden : Fence
 - 4. Room : Door

Question ID : 9895801299

Status : Answered

Chosen Option : 4

Q.1
1 Chlorine is related to Halogen in the same way as Neon is related to _____.

- Ans
- 1. Metal
 - 2. Radio Active
 - 3. Gas
 - 4. Inert Gas

Question ID : 9895801293

Status : Answered

Chosen Option : 4

Q.1 Select the option that is related to the third term in the same way as the second term is related to the first term.

2

Jurist : Law :: Orator : ?

- Ans
- 1. Lawyer
 - 2. Writing
 - 3. Acting
 - 4. Speech

Question ID : 9895801490

Status : Answered

Chosen Option : 4

Q.1 The statements below are followed by two conclusions labeled I and II. Assuming that the information in the statements is true, even if it appears to be at variance with generally established facts, decide which conclusion(s) logically and definitely follow(s) from the information given in the statements.

3

Statements:

Some tents are cones.

All the cones are motels.

Conclusions:

I. All the motels are cones.

II. Some tents are motels.

- Ans
- 1. Neither conclusion (I) nor (II) follows
 - 2. Only conclusion (II) follows.
 - 3. Either conclusion (I) or (II) follows
 - 4. Only conclusion (I) follows.

Question ID : 9895801300

Status : Answered

Chosen Option : 3

Q.1 If 'A' is replaced by '+'; if 'B' is replaced by '-'; 'C' is replaced by '++'; and 'D' replaced by 'x', then find the value of the following equation.

4

20A15C3D8B9

- Ans
- 1. 65
 - 2. 51

3. 55

4. 53

Question ID : 9895801313
Status : Answered
Chosen Option : 2

Q.1 5 If moon is called sea, sea is called water, water is called air, air is called sun, sun is called river, river is called salt and salt is known as neem, then from where do we get SALT?

- Ans
- 1. Sea
 - 2. Salt
 - 3. Water
 - 4. Neem

Question ID : 9895801290
Status : Answered
Chosen Option : 3

Q.1 6 Replace the question mark (?) with the suitable option to complete the series.

AKT, BLU, CMV, D?W, EOX

- Ans
- 1. M
 - 2. P
 - 3. N
 - 4. O

Question ID : 9895801286
Status : Answered
Chosen Option : 3

Q.1 7 In a shopping mall, five water bottles labeled as A, B, C, D and E were placed in a rack.

The bottle A has less price than the bottle B. The bottle C has less price than the bottle D. The bottle B has less price than the bottle C and bottle A has more price than the bottle E.

If a customer want to buy a bottle of maximum price, then which bottle he/she has to buy?

- Ans
- 1. D
 - 2. B
 - 3. C
 - 4. A

Question ID : 9895801297
Status : Answered
Chosen Option : 1

Q.1 8 Find out the two signs to be interchanged for making following equation correct:

$$25 + 5 \times 7 - 12 \div 3 = 26$$

- Ans
- 1. + and -
 - 2. + and ×
 - 3. + and ÷

4. — and ÷

Question ID : 9895801493

Status : Answered

Chosen Option : 3

Q.1
9 Select the correct option that will fill in the blank and complete the series.

_____, XEE, VGG, TII, RKK

Ans 1. DCC

2. ZCC

3. BCC

4. ACC

Question ID : 9895801291

Status : Answered

Chosen Option : 2

Q.2
0 If in a code language, LAPTOP is written as PNSOZL and NOTEBOOK and KNNADSNN, then which letter will be there in first and seventh letter from left after coding MEDICINE in the same way?

Ans 1. ED

2. BD

3. HM

4. DM

Question ID : 9895801303

Status : Not Attempted and Marked For Review

Chosen Option : --

Q.2
1 Find the missing term in the given analogous pair.

1 : 4, 3 : 14 :: 5 : 32, 7 : _____

Ans 1. 58

2. 79

3. 85

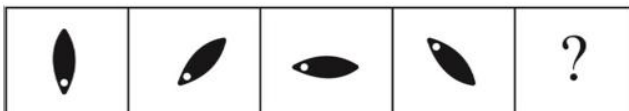
4. 97

Question ID : 9895801306


Status : Answered

Chosen Option : 1

Q.2
2 Choose the correct option that will replace the question mark and continue the given figure series.



Ans



Question ID : 9895801328
 Status : Answered
 Chosen Option : 3

Q.2 In an automobile showroom, seven two-wheelers of seven different companies, viz. H, M, T, V, Y, B and S are displayed in a row, facing east such that:

1. The H vehicle is to the immediate right of the S vehicle.
2. The S is fourth to the right of T.
3. The V is between the M and the B.
4. The T, which is third to the left of the M, is at one of the ends.

Which vehicle is second to the left of the M?

- Ans
1. V
 2. S
 3. B
 4. T

Question ID : 9895801301
 Status : Answered
 Chosen Option : 2

Q.2 Find the missing number from the below options.

16	25	81
36	49	9
10	12	?

- Ans
1. 15
 2. 12
 3. 21
 4. 36

Question ID : 9895801314
 Status : Answered
 Chosen Option : 2

Q.2 Select the option that is related to the third term in the same way as the second term is related to the first term.

5
 Grief : Anguish :: Pique : ?

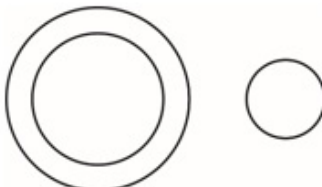


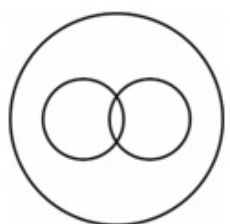
- Ans
- 1. Joy
 - 2. Anger
 - 3. Jealous
 - 4. Tensed

Question ID : 9895801294
Status : Not Answered
Chosen Option : --

Q.2
6 Which Venn diagram best represents the given set of classes?

Bedroom, Kitchen, House

Ans

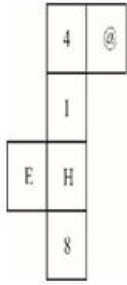
- 1. 
- 2. 
- 3. 
- 4. 

Question ID : 9895801326
Status : Answered
Chosen Option : 2

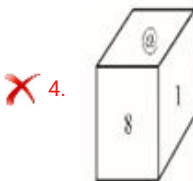
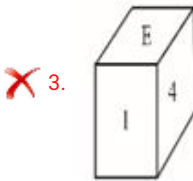
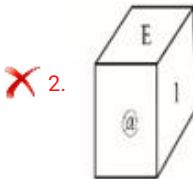
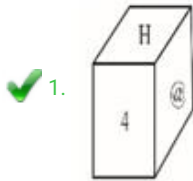
Q.2
7 In a code language, DOUBT is written as CPTCS, and OTHER is written as NUGFQ. How will SHOUT be written in that code language?

- Ans
- 1. RGNTS
 - 2. TIPVU
 - 3. RIPTU
 - 4. RINVS

Q.2 Choose the box that is similar to the box formed from the given sheet of paper.



Ans



Q.2 Select the option that is related to the third term in the same way as the second term is related to the first term.

45 : 135 :: 60 : ?

Ans ✗ 1. 175

✗ 2. 210

✗ 3. 140

✓ 4. 180

Status : **Answered**
Chosen Option : 4

Q.3
0 Find out the two signs to be interchanged for making following equation correct.

$$5 + 3 \times 4 - 12 \div 2 = -1$$

- Ans 1. + and -
 2. + and \times
 3. + and \div
 4. \times and \div

Question ID : 9895801319
Status : **Not Attempted and Marked For Review**
Chosen Option : --

Q.3
1 Find the missing number from the below options.

3 10

5 8

7 ?

5 8

- Ans 1. 7
 2. 5
 3. 6
 4. 8

Question ID : 9895801315
Status : **Answered**
Chosen Option : 3

Q.3
2 Select the option that is related to the third term in the same way as the second term is related to the first term.

$$56 : 8 :: 91 : ?$$

- Ans 1. 17
 2. 13
 3. 15
 4. 19

Question ID : 9895801494
Status : **Answered**
Chosen Option : 2

Q.3
3 If 'A' is replaced by '+'; if 'B' is replaced by '-'; 'C' is replaced by ' \times '; and 'D' replaced by ' \div ', find the value of the following equation.

$$51C17D15A22B34$$

- Ans 1. 45

2. 55

3. 33

4. 65

Question ID : 9895801312

Status : Answered

Chosen Option : 3

Q.3
4 Select the correct option that will fill in the blank and complete the series.

12, 24, 96, 576, _____

Ans 1. 4506

2. 4160

3. 4608

4. 4000

Question ID : 9895801307

Status : Answered

Chosen Option : 3

Q.3
5 Select the correct option that will fill in the blank and complete the series.

35, 40, 50, 70, 110, ?

Ans 1. 140

2. 170

3. 190

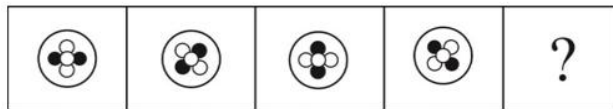
4. 160

Question ID : 9895801492

Status : Answered

Chosen Option : 3

Q.3
6 Choose the correct option that will replace the question mark and continue the given figure series.



Ans 1. 

2. 



Question ID : 9895801329
Status : Answered
Chosen Option : 4

Q.3 Four words have been given out of which three are alike in some manner, while one is different. Choose the odd one.
7

- Ans 1. Fenugreek
 2. Coccinia
 3. Amaranth
 4. Spinach

Question ID : 9895801289
Status : Answered
Chosen Option : 4

Q.3 Select the correct option that will fill in the blank and complete the series.
8

6, 9, 15, 27, 51, _____


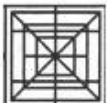
- Ans 1. 99
 2. 77
 3. 66
 4. 88

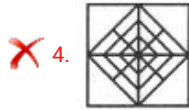
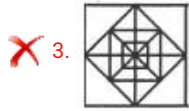
Question ID : 9895801308
Status : Answered
Chosen Option : 1

Q.3 Choose the option figure in which the problem figure is hidden/embedded.
9

Problem figure:



- Ans 1. 
 2. 



Question ID : 9895801330
Status : Answered
Chosen Option : 1

Q.4 Find the odd letter cluster.

- 0
Ans 1. NM
 2. BD
 3. IR
 4. PK

Question ID : 9895801302
Status : Answered
Chosen Option : 2

Q.4 Observe the series and answer the question. What will be the fourth letter of the missing term?

1
BPCR, DPES, FPGT, ?, JPKV

- Ans 1. Y
 2. U
 3. X
 4. W

Question ID : 9895801304
Status : Answered
Chosen Option : 2

Q.4 Select the correct option that will fill in the blank and complete the series.

2
2, 3, 9, 12, 30, 39, 93, _____

- Ans 1. 201
 2. 120
 3. 102
 4. 210

Question ID : 9895801310
Status : Answered
Chosen Option : 2

Q.4 Four words have been given out of which three are alike in some manner, while one is different. Choose the odd one.

- 3
Ans 1. Carbohydrates

✓ 2. Enzymes

✗ 3. Proteins

✗ 4. Vitamins

Question ID : 9895801489

Status : Answered

Chosen Option : 2

Q.4 Select the correct option that will fill in the blank and complete the series.

4

P_2CT , _____, PCT_4 , P_5CT , PC_6T

Ans ✓ 1. PC_3T

✗ 2. P_2C_3T

✗ 3. P_2C_2T

✗ 4. PCT_7

Question ID : 9895801285

Status : Answered

Chosen Option : 1

Q.4 Choose the alternative which most closely resembles the mirror image of the given word when mirror is placed at XY line.

5

APTITUDE
X
|
|
|
|
|
|
|
|
Y

Ans ✗ 1. APTITUDE

✓ 2. EDUTITAE

✗ 3. APTITUEA

✗ 4. APTITUEA

Question ID : 9895801327

Status : Answered

Chosen Option : 2

Q.4 Six friends - A, B, C, D, E and F are sitting in a circle facing center. F is to the immediate left of A and B is sitting opposite to F. E and D are sitting opposite to each other. Who is sitting third right to A?

6

Ans ✗ 1. F

✗ 2. E

✓ 3. C

✗ 4. A

Question ID : 9895801296

Status : Not Answered

Chosen Option : --

Q.4
7 Replace the question mark (?) with the suitable option to complete the series.

MA?, PDF, SGI, VJL

- Ans
- 1. D
 - 2. G
 - 3. C
 - 4. J

Question ID : 9895801305
Status : Answered
Chosen Option : 3

Q.4
8 Four pairs of numbers have been given, out of which three are alike in some manner, while one is different. Choose out the odd one.

- Ans
- 1. 4925 : 35
 - 2. 1625 : 9
 - 3. 4964 : 15
 - 4. 

Question ID : 9895801316
Status : Answered
Chosen Option : 1

Q.4
9 The statements below are followed by four conclusions labeled I, II, III and IV. Assuming that the information in the statements is true, even if it appears to be at variance with generally established facts, decide which conclusion(s) logically and definitely follow(s) from the information given in the statements.

Statements:

No laptop is notebook.

All notebooks are tablets.

Conclusions:

- I. No laptop is tablets.
- II. No tablets is laptop.
- III. Some tablets are notebooks.
- IV. All the tablets are notebooks.

- Ans
- 1. Only conclusion (III) follows.
 - 2. Only conclusion (II) and (IV) follow.
 - 3. Only conclusion (III) and (IV) follow.
 - 4. Only conclusion (I) and (III) follow.

Question ID : 9895801298
Status : Answered
Chosen Option : 2

Q.5
0 The statements given below are followed by two conclusions labeled I and II. Without resolving anything yourself, choose the conclusion which logically follows from the given statement.

Statements:

Most of the advocates are hard working.

Manoj is advocate.

Conclusion I: Manoj is politician.

Conclusion II: Some advocates do not work hard.

Ans 1. Neither conclusion I nor conclusion II follows.

2. Only conclusion II follows.

3. Both conclusions I and II follow.

4. Only conclusion I follow.

Question ID : 9895801281

Status : Answered

Chosen Option : 2